

Ordinary Thinking

Objective Questions

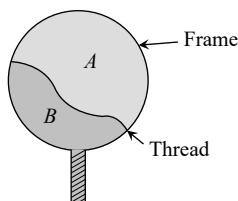
Surface Tension

- The value of surface tension of a liquid at critical temperature is [AIIMS 1980]
 - Zero
 - Infinite
 - Between 0 and ∞
 - Can not be determined
- The spherical shape of rain-drop is due to [CPMT 1976, 90; NCERT 1982; AIIMS 1998; MH CET 2000; DCE 1999; AFMC 1999; CPMT 2001; AFMC 2001]
 - Density of the liquid
 - Surface tension
 - Atmospheric pressure
 - Gravity
- Surface tension is due to
 - Frictional forces between molecules
 - Cohesive forces between molecules
 - Adhesive forces between molecules
 - Gravitational forces
- When there is no external force, the shape of a liquid drop is determined by [CPMT 1988, 86; DPMT 1982]
 - Surface tension of the liquid
 - Density of liquid
 - Viscosity of liquid
 - Temperature of air only
- Soap helps in cleaning clothes, because [DPMT 1983, 2001]
 - Chemicals of soap change
 - It increases the surface tension of the solution
 - It absorbs the dirt
 - It lowers the surface tension of the solution
- A pin or a needle floats on the surface of water, the reason for this is [MP PET/PMT 1988; CPMT 1975]
 - Surface tension
 - Less weight
 - Upthrust of liquid
 - None of the above
- Coatings used on raincoat are waterproof because
 - Water is absorbed by the coating
 - Cohesive force becomes greater
 - Water is not scattered away by the coating
 - Angle of contact decreases
- If temperature increases, the surface tension of a liquid [MP PMT 1994; EAMCET (Engg.) 1995; RPET 2003]
 - Increases
 - Decreases
 - Remains the same
 - Increases then decreases
- A drop of oil is placed on the surface of water. Which of the following statement is correct [NCERT 1976; DPMT 1982]
 - It will remain on it as a sphere
 - It will spread as a thin layer
 - It will be partly as spherical droplets and partly as thin film
 - It will float as a distorted drop on the water surface
- The temperature at which the surface tension of water is zero
 - 0°C
 - 277 K
 - 370°C
 - Slightly less than 647 K
- A small air bubble is at the inner surface of the bottom of a beaker filled with cold water. Now water of the beaker is heated. The size of bubble increases. The reason for this may be
 - Increase in the saturated vapour pressure of water
 - Root mean square velocity of air molecules inside the bubble increases
 - Decrease in surface tension of water
 - All of the above
- The spiders and insects move and run about on the surface of water without sinking because
 - Elastic membrane is formed on water due to property of surface tension
 - Spiders and insects are lighter
 - Spiders and insects swim on water
 - Spider and insects experience upthrust
- Small droplets of a liquid are usually more spherical in shape than larger drops of the same liquid because [EAMCET 1988]
 - Surface tension
 - Spiders and insects are lighter
 - Spiders and insects swim on water
 - Spider and insects experience upthrust

- (a) Force of surface tension is equal and opposite to the force of gravity
 (b) Force of surface tension predominates the force of gravity
 (c) Force of gravity predominates the force of surface tension
 (d) Force of gravity and force of surface tension act in the same direction and are equal
14. Hairs of shaving brush cling together when it is removed from water due to
 (a) Force of attraction between hair
 (b) Surface tension
 (c) Viscosity of water
 (d) Characteristic property of hairs
15. A square frame of side L is dipped in a liquid. On taking out, a membrane is formed. If the surface tension of the liquid is T , the force acting on the frame will be
 [MP PMT 1990; DPMT 2004]
 (a) $2 TL$ (b) $4 TL$
 (c) $8 TL$ (d) $10 TL$
16. Water does not wet an oily glass because
 (a) Cohesive force of oil \gg adhesive force between oil and glass
 (b) Cohesive force of oil $>$ cohesive force of water
 (c) Oil repels water
 (d) Cohesive force for water $>$ adhesive force between water and oil molecules
17. A water drop takes the shape of a sphere in a oil while the oil drop spreads in water, because
 (a) C.F. for water $>$ A.F. for water and oil
 (b) C.F. for oil $>$ A.F. for water and oil
 (c) C.F. for oil $<$ A.F. for water and oil
 (d) None of the above
 (A.F. = adhesive force C.F. = cohesive force)
18. Which of the fact is not due to surface tension
 (a) Dancing of a camphor piece over the surface of water
 (b) Small mercury drop itself becomes spherical
 (c) A liquid surface comes at rest after stirring
 (d) Mercury does not wet the glass vessel
19. In the glass capillary tube, the shape of the surface of the liquid depends upon
 [MP PMT 1989]
 (a) Only on the cohesive force of liquid molecules
 (b) Only on the adhesive force between the molecules of glass and liquid
 (c) Only on relative cohesive and adhesive force between the atoms
 (d) Neither on cohesive nor on adhesive force
20. Force necessary to pull a circular plate of 5 cm radius from water surface for which surface tension is 75 dynes/cm , is
 [MP PMT 1991]
 (a) 30 dyne (b) 60 dynes
 (c) 750 dynes (d) $750\pi\text{ dynes}$
21. The property of surface tension is obtained in
 (a) Solids, liquids and gases (b) Liquids
 (c) Gases (d) Matter
22. The surface tension of a liquid
 [MNR 1990]
 (a) Increases with area
 (b) Decreases with area
 (c) Increase with temperature
 (d) Decrease with temperature
23. If two glass plates are quite nearer to each other in water, then there will be force of
 (a) Attraction (b) Repulsion
 (c) Attraction or repulsion (d) None of the above
24. On mixing the salt in water, the surface tension of water will
 (a) Increase (b) Decrease
 (c) Remain unchanged (d) None of the above
25. The maximum force, in addition to the weight required to pull a wire of 5.0 cm long from the surface of water at temperature 20°C , is 728 dynes . The surface tension of water is
 (a) 7.28 N/cm (b) 7.28 dyne/cm
 (c) 72.8 dyne/cm (d) $7.28 \times 10^2\text{ dyne/cm}$

26. Consider a liquid contained in a vessel. The liquid solid adhesive force is very weak as compared to the cohesive force in the liquid. The shape of the liquid surface near the solid shall be [MNR 1994]
 (a) Horizontal (b) Almost vertical
 (c) Concave (d) Convex
27. At which of the following temperatures, the value of surface tension of water is minimum [MP PMT/PET 1998]
 (a) 4° C (b) 25° C
 (c) 50° C (d) 75° C
28. If a glass rod is dipped in mercury and withdrawn out, the mercury does not wet the rod because [MP PET 1995]
 (a) Angle of contact is acute
 (b) Cohesion force is more
 (c) Adhesion force is more
 (d) Density of mercury is more
29. Mercury does not wet glass, wood or iron because [MP PET 1997]
 (a) Cohesive force is less than adhesive force
 (b) Cohesive force is greater than adhesive force
 (c) Angle of contact is less than 90°
 (d) Cohesive force is equal to adhesive force
30. Surface tension of a liquid is found to be influenced by [ISM Dhanbad 1994]
 (a) It increases with the increase of temperature
 (b) Nature of the liquid in contact
 (c) Presence of soap that increases it
 (d) Its variation with the concentration of the liquid
31. When a drop of water is dropped on oil surface, then [RPMT 1997]
 (a) It will mix up with oil
 (b) It spreads in the form of a film
 (c) It will deform
 (d) It remains spherical
32. Two pieces of glass plate one upon the other with a little water in between them cannot be separated easily because of [JIPMER 1997]
 (a) Inertia (b) Pressure
 (c) Surface tension (d) Viscosity
33. Small liquid drops assume spherical shape because [JIPMER 1997]
 (a) Atmospheric pressure exerts a force on a liquid drop
 (b) Volume of a spherical drop is minimum
 (c) Gravitational force acts upon the drop
 (d) Liquid tends to have the minimum surface area due to surface tension
34. A thin metal disc of radius r floats on water surface and bends the surface downwards along the perimeter making an angle θ with vertical edge of the disc. If the disc displaces a weight of water W and surface tension of water is T , then the weight of metal disc is [AMU (Med.) 1999]
 (a) $2\pi rT + W$ (b) $2\pi rT \cos\theta - W$
 (c) $2\pi rT \cos\theta + W$ (d) $W - 2\pi rT \cos\theta$
35. A 10 cm long wire is placed horizontally on the surface of water and is gently pulled up with a force of 2×10^{-2} N to keep the wire in equilibrium. The surface tension, in Nm^{-1} , of water is [AMU (Med.) 1999]
 (a) 0.1 (b) 0.2
 (c) 0.001 (d) 0.002
36. It is easy to wash clothes in hot water because its [RPMT 2000]
 (a) Surface tension is more
 (b) Surface tension is less
 (c) Consumes less soap
 (d) None of these
37. Due to which property of water, tiny particles of camphor dance on the surface of water
 (a) Viscosity (b) Surface tension
 (c) Weight (d) Floating force
38. The force required to separate two glass plates of area $10^{-2} m^2$ with a film of water 0.05 mm thick between them, is (Surface tension of water is $70 \times 10^{-3} N/m$) [KCET 2000; Pb. PET 2001; RPET 2002]

- (a) 28 N (b) 14 N
(c) 50 N (d) 38 N
39. Oil spreads over the surface of water whereas water does not spread over the surface of the oil, due to [MH CET 2001]
(a) Surface tension of water is very high
(b) Surface tension of water is very low
(c) Viscosity of oil is high
(d) Viscosity of water is high
40. Cohesive force is experienced between [MH CET 2001]
(a) Magnetic substances
(b) Molecules of different substances
(c) Molecules of same substances
(d) None of these
41. The property utilized in the manufacture of lead shots is [AIIMS 2002]
(a) Specific weight of liquid lead
(b) Specific gravity of liquid lead
(c) Compressibility of liquid lead
(d) Surface tension of liquid lead
42. The dimensions of surface tension are [MH CET 2002]
(a) $[MLT^{-1}]$ (b) $[ML^2T^{-2}]$
(c) $[ML^0T^{-2}]$ (d) $[ML^{-1}T^{-2}]$
43. A wooden stick 2m long is floating on the surface of water. The surface tension of water 0.07 N/m. By putting soap solution on one side of the sticks the surface tension is reduced to 0.06 N/m. The net force on the stick will be [Pb. PMT 2002]
(a) 0.07 N (b) 0.06 N
(c) 0.01 N (d) 0.02 N
44. A thread is tied slightly loose to a wire frame as in figure and the frame is dipped into a soap solution and taken out. The frame is completely covered with the film. When the portion A punctured with a pin, the thread. [KCET 2004]



- (a) Becomes concave toward A
(b) Becomes convex towards A
(c) Remains in the initial position
(d) Either (a) or (b) depending on the size of A w.r.t. B
45. The force required to take away a flat circular plate of radius 2 cm from the surface of water, will be (the surface tension of water is 70 dyne/cm) [Pb. PET 2001]
(a) 280π dyne (b) 250π dyne
(c) 140π dyne (d) 210π dyne
46. Surface tension may be defined as [CPMT 1990]
(a) The work done per unit area in increasing the surface area of a liquid under isothermal condition
(b) The work done per unit area in increasing the surface area of a liquid under adiabatic condition
(c) The work done per unit area in increasing the surface area of a liquid under both isothermal and adiabatic conditions
(d) Free surface energy per unit volume

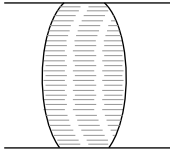
Surface Energy

- Energy needed in breaking a drop of radius R into n drops of radii r is given by [CPMT 1982, 97]
(a) $4\pi\mathcal{T}(nr^2 - R^2)$ (b) $\frac{4}{3}\pi(r^3n - R^2)$
(c) $4\pi\mathcal{T}(R^2 - nr^2)$ (d) $4\pi\mathcal{T}(nr^2 + R^2)$
- The potential energy of a molecule on the surface of liquid compared to one inside the liquid is [MP PMT 1993]
(a) Zero (b) Smaller
(c) The same (d) Greater
- Two droplets merge with each other and forms a large droplet. In this process [CBSE PMT 1993; RPMT 1997, 2000; CPMT 2001; BHU 2001; AFMC 2002]
(a) Energy is liberated
(b) Energy is absorbed
(c) Neither liberated nor absorbed


- (d) Some mass is converted into energy
4. A drop of liquid of diameter 2.8 mm breaks up into 125 identical drops. The change in energy is nearly (S.T. of liquid = 75 dynes/cm)
[CPMT 1989]
(a) Zero (b) 19 erg
(c) 46 erg (d) 74 erg
5. Radius of a soap bubble is 'r', surface tension of soap solution is T. Then without increasing the temperature, how much energy will be needed to double its radius
[CPMT 1991; Pb. PMT 2000; RPET 2001]
(a) $4\pi r^2 T$ (b) $2\pi r^2 T$
(c) $12\pi r^2 T$ (d) $24\pi r^2 T$
6. Work done in splitting a drop of water of 1 mm radius into 10^6 droplets is (Surface tension of water = $72 \times 10^{-3} \text{ J/m}^2$)
[MP PET/PMT 1988; CPMT 1989; RPET 2001]
(a) $9.58 \times 10^{-5} \text{ J}$ (b) $8.95 \times 10^{-5} \text{ J}$
(c) $5.89 \times 10^{-5} \text{ J}$ (d) $5.98 \times 10^{-6} \text{ J}$
7. A spherical liquid drop of radius R is divided into eight equal droplets. If surface tension is T, then the work done in this process will be
[CPMT 1990]
(a) $2\pi R^2 T$ (b) $3\pi R^2 T$
(c) $4\pi R^2 T$ (d) $2\pi RT^2$
8. The amount of work done in blowing a soap bubble such that its diameter increases from d to D is (T = surface tension of the solution)
[MP PMT 1996]
(a) $4\pi(D^2 - d^2)T$ (b) $8\pi(D^2 - d^2)T$
(c) $\pi(D^2 - d^2)T$ (d) $2\pi(D^2 - d^2)T$
9. If T is the surface tension of soap solution, the amount of work done in blowing a soap bubble from a diameter D to 2D is
[MP PMT 1990]
(a) $2\pi D^2 T$ (b) $4\pi D^2 T$
(c) $6\pi D^2 T$ (d) $8\pi D^2 T$
10. The radius of a soap bubble is increased from $\frac{1}{\sqrt{\pi}} \text{ cm}$ to $\frac{2}{\sqrt{\pi}} \text{ cm}$. If the surface tension of water is 30 dynes per cm, then the work done will be
[MP PMT 1986]
(a) 180 ergs (b) 360 ergs
(c) 720 ergs (d) 960 ergs
11. The surface tension of a liquid is 5 N/m. If a thin film of the area 0.02 m² is formed on a loop, then its surface energy will be
[CPMT 1977; MP PET 1989; BCECE 2005]
(a) $5 \times 10^2 \text{ J}$ (b) $2.5 \times 10^{-2} \text{ J}$
(c) $2 \times 10^{-1} \text{ J}$ (d) $5 \times 10^{-1} \text{ J}$
12. If work W is done in blowing a bubble of radius R from a soap solution, then the work done in blowing a bubble of radius 2R from the same solution is
[MP PET 1990]
(a) W/2 (b) 2W
(c) 4W (d) $2\frac{1}{3}W$
13. A spherical drop of oil of radius 1 cm is broken into 1000 droplets of equal radii. If the surface tension of oil is 50 dynes/cm, the work done is
[MP PET 1990]
(a) $18\pi \text{ ergs}$ (b) $180\pi \text{ ergs}$
(c) $1800\pi \text{ ergs}$ (d) $8000\pi \text{ ergs}$
14. The work done in blowing a soap bubble of radius r of the solution of surface tension T will be
[DPMT 1999; MP PMT 2003]
(a) $8\pi r^2 T$ (b) $2\pi r^2 T$
(c) $4\pi r^2 T$ (d) $\frac{4}{3}\pi r^2 T$
15. If two identical mercury drops are combined to form a single drop, then its temperature will
[RPET 2000]
(a) Decrease (b) Increase
(c) Remains the same (d) None of the above
16. If the surface tension of a liquid is T, the gain in surface energy for an increase in liquid surface by A is
[MP PET 1991; RPMT 2002]
(a) AT^{-1} (b) AT
(c) $A^2 T$ (d) $A^2 T^2$
17. The surface tension of a soap solution is $2 \times 10^{-2} \text{ N/m}$. To blow a bubble of radius 1 cm, the work done is
[MP PMT 1989]
(a) $4\pi \times 10^{-6} \text{ J}$ (b) $8\pi \times 10^{-6} \text{ J}$

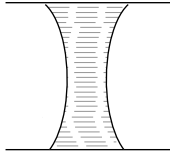
- (c) $12\pi \times 10^{-6} J$ (d) $16\pi \times 10^{-6} J$
18. A mercury drop of 1 cm radius is broken into 10^6 small drops. The energy used will be (surface tension of mercury is $35 \times 10^{-3} N/cm$)
[Roorkee 1984]
(a) $4.4 \times 10^{-3} J$ (b) $2.2 \times 10^{-4} J$
(c) $8.8 \times 10^{-4} J$ (d) $10^4 J$
19. The surface tension of a liquid at its boiling point
[MP PMT 1980]
(a) Becomes zero
(b) Becomes infinity
(c) is equal to the value at room temperature
(d) is half to the value at the room temperature
20. Surface tension of a soap solution is $1.9 \times 10^{-2} N/m$. Work done in blowing a bubble of 2.0 cm diameter will be
[MP PMT 1991]
(a) $7.6 \times 10^{-6} \pi \text{ joule}$ (b) $15.2 \times 10^{-6} \pi \text{ joule}$
(c) $1.9 \times 10^{-6} \pi \text{ joule}$ (d) $1 \times 10^{-4} \text{ joule}$
21. The surface tension of liquid is 0.5 N/m. If a film is held on a ring of area $0.02 m^2$, its surface energy is
[CPMT 1977]
(a) $5 \times 10^{-2} \text{ joule}$ (b) $2.0 \times 10^{-2} \text{ joule}$
(c) $4 \times 10^{-4} \text{ joule}$ (d) $0.8 \times 10^{-1} \text{ joule}$
22. What is ratio of surface energy of 1 small drop and 1 large drop, if 1000 small drops combined to form 1 large drop
[CPMT 1990]
(a) 100 : 1 (b) 1000 : 1
(c) 10 : 1 (d) 1 : 100
23. The amount of work done in forming a soap film of size $10 cm \times 10 cm$ is (Surface tension $T = 3 \times 10^{-2} N/m$)
[MP PET 1994; MP PET 2000]
(a) $6 \times 10^{-4} J$ (b) $3 \times 10^{-4} J$
(c) $6 \times 10^{-3} J$ (d) $3 \times 10^{-4} J$
24. The work done in blowing a soap bubble of 10 cm radius is (Surface tension of the soap solution is $\frac{3}{100} N/m$)
[MP PMT 1995; MH CET 2002]
(a) $75.36 \times 10^{-4} \text{ joule}$ (b) $37.68 \times 10^{-4} \text{ joule}$
- (c) $150.72 \times 10^{-4} \text{ joule}$ (d) 75.36 joule
25. A liquid drop of diameter D breaks upto into 27 small drops of equal size. If the surface tension of the liquid is σ , then change in surface energy is
[DCE 2005]
(a) $\pi D^2 \sigma$ (b) $2\pi D^2 \sigma$
(c) $3\pi D^2 \sigma$ (d) $4\pi D^2 \sigma$
26. One thousand small water drops of equal radii combine to form a big drop. The ratio of final surface energy to the total initial surface energy is
[MP PET 1997; KCET 1999]
(a) 1000 : 1 (b) 1 : 1000
(c) 10 : 1 (d) 1 : 10
27. The work done in increasing the size of a soap film from $10 cm \times 6 cm$ to $10 cm \times 11 cm$ is $3 \times 10^{-4} \text{ joule}$. The surface tension of the film is
[MP PET 1999; JIPMER 2001, 02; MP PMT 2000; AIIMS 2000]
(a) $1.5 \times 10^{-2} N/m$ (b) $3.0 \times 10^{-2} N/m$
(c) $6.0 \times 10^{-2} N/m$ (d) $11.0 \times 10^{-2} N/m$
28. If σ be the surface tension, the work done in breaking a big drop of radius R in n drops of equal radius is
[Bihar CEET 1995]
(a) $Rn^{2/3} \sigma$ (b) $(n^{2/3} - 1)R\sigma$
(c) $(n^{1/3} - 1)R\sigma$ (d) $4\pi R^2 (n^{1/3} - 1)\sigma$
(e) $\frac{1}{n^{1/3} - 1} \sigma R$
29. A big drop of radius R is formed by 1000 small droplets of water, then the radius of small drop is
[AFMC 1998; Pb. PMT 2000]
(a) $R/2$ (b) $R/5$
(c) $R/6$ (d) $R/10$
30. When 10^6 small drops coalesce to make a new larger drop then the drop
(a) Density increases
(b) Density decreases
(c) Temperature increases
(d) Temperature decreases
31. Which of the following statements are true in

- case when two water drops coalesce and make a bigger drop
[Roorkee 1999]
- (a) Energy is released
(b) Energy is absorbed
(c) The surface area of the bigger drop is greater than the sum of the surface areas of both the drops
(d) The surface area of the bigger drop is smaller than the sum of the surface areas of both the drops
32. 8000 identical water drops are combined to form a big drop. Then the ratio of the final surface energy to the initial surface energy of all the drops together is [EAMCET (Engg.) 2000]
- (a) 1 : 10 (b) 1 : 15
(c) 1 : 20 (d) 1 : 25
33. The surface energy of liquid film on a ring of area 0.15 m^2 is (Surface tension of liquid = 5 Nm^{-1}) [EAMCET (Engg.) 2000]
- (a) 0.75 J (b) 1.5 J
(c) 2.25 J (d) 3.0 J
34. 8 mercury drops coalesce to form one mercury drop, the energy changes by a factor of
- (a) 1 (b) 2
(c) 4 (d) 6
35. If work done in increasing the size of a soap film from $10 \text{ cm} \times 6 \text{ cm}$ to $10 \text{ cm} \times 11 \text{ cm}$ is $2 \times 10^{-4} \text{ J}$, then the surface tension is [AIIMS 2000]
- (a) $2 \times 10^{-2} \text{ Nm}^{-1}$ (b) $2 \times 10^{-4} \text{ Nm}^{-1}$
(c) $2 \times 10^{-6} \text{ Nm}^{-1}$ (d) $2 \times 10^{-8} \text{ Nm}^{-1}$
36. A mercury drop of radius 1 cm is sprayed into 10^6 drops of equal size. The energy expended in joules is (surface tension of Mercury is $460 \times 10^{-3} \text{ N/m}$) [EAMCET 2001]
- (a) 0.057 (b) 5.7
(c) 5.7×10^{-4} (d) 5.7×10^{-6}
37. When two small bubbles join to form a bigger one, energy is [BHU 2001]
- (a) Released (b) Absorbed
- (c) Both (a) and (b) (d) None of these
38. A film of water is formed between two straight parallel wires of length 10 cm each separated by 0.5 cm . If their separation is increased by 1 mm while still maintaining their parallelism, how much work will have to be done (Surface tension of water = $7.2 \times 10^{-2} \text{ N/m}$)
- (a) $7.22 \times 10^{-6} \text{ Joule}$ (b) $1.44 \times 10^{-5} \text{ Joule}$
(c) $2.88 \times 10^{-5} \text{ Joule}$ (d) $5.76 \times 10^{-5} \text{ Joule}$
39. A drop of mercury of radius 2 mm is split into 8 identical droplets. Find the increase in surface energy. (Surface tension of mercury is 0.465 J/m^2) [UPSEAT 2002]
- (a) $23.4 \mu\text{J}$ (b) $18.5 \mu\text{J}$
(c) $26.8 \mu\text{J}$ (d) $16.8 \mu\text{J}$
40. Two small drops of mercury, each of radius R , coalesce to form a single large drop. The ratio of the total surface energies before and after the change is [AIIMS 2003; DCE 2003]
- (a) $1 : 2^{1/3}$ (b) $2^{1/3} : 1$
(c) $2 : 1$ (d) $1 : 2$
41. Radius of a soap bubble is increased from R to $2R$ work done in this process in terms of surface tension is [BHU 2003, RPET 2001; CPMT 2004]
- (a) $24\pi R^2 S$ (b) $48\pi R^2 S$
(c) $12\pi R^2 S$ (d) $36\pi R^2 S$
42. The work done in blowing a soap bubble of radius 0.2 m is (the surface tension of soap solution being 0.06 N/m) [Pb. PET 2002]
- (a) $192\pi \times 10^{-4} \text{ J}$ (b) $280\pi \times 10^{-4} \text{ J}$
(c) $200\pi \times 10^{-3} \text{ J}$ (d) None of these
43. A liquid film is formed in a loop of area 0.05 m^2 . Increase in its potential energy will be ($T = 0.2 \text{ N/m}$) [RPMT 2002]
- (a) $5 \times 10^{-2} \text{ J}$ (b) $2 \times 10^{-2} \text{ J}$
(c) $3 \times 10^{-2} \text{ J}$ (d) None of these
44. In order to float a ring of area 0.04 m^2 in a liquid of surface tension 75 N/m , the required surface energy will be [RPMT 2003]

- (a) 3 J (b) 6.5 J
(c) 1.5 J (d) 4 J
45. If two soap bubbles of equal radii r coalesce then the radius of curvature of interface between two bubbles will be [J&K CET 2005]
(a) r (b) 0
(c) Infinity (d) $1/2r$
- Angle of Contact**
1. A liquid does not wet the sides of a solid, if the angle of contact is [MP PAT 1990; AFMC 1988; MNR 1998; RPMT 1999, 2003; Pb. PMT 2002 KCET 2005]
(a) Zero (b) Obtuse (More than 90°)
(c) Acute (Less than 90°) (d) 90°
2. The meniscus of mercury in the capillary tube is [MP PET/PMT 1988]
(a) Convex (b) Concave
(c) Plane (d) Uncertain
3. When the temperature is increased the angle of contact of a liquid [AIIMS 1980]
(a) Increases
(b) Decreases
(c) Remains the same
(d) First increases and then decreases
4. The angle of contact between glass and mercury is [MP PMT 1987]
(a) 0° (b) 30°
(c) 90° (d) 135°
5. A mercury drop does not spread on a glass plate because the angle of contact between glass and mercury is [MP PMT 1984]
(a) Acute (b) Obtuse
(c) Zero (d) 90°
6. A liquid is coming out from a vertical tube. The relation between the weight of the drop W , surface tension of the liquid T and radius of the tube r is given by, if the angle of contact is zero
(a) $W = \pi r^2 T$ (b) $W = 2\pi r T$
(c) $W = 2r^2 \pi T$ (d) $W = \frac{3}{4} \pi r^3 T$
7. The parts of motor cars are polished by chromium because the angle of contact between water and chromium is
(a) 0° (b) 90°
(c) Less than 90° (d) Greater than 90°
8. A glass plate is partly dipped vertically in the mercury and the angle of contact is measured. If the plate is inclined, then the angle of contact will
(a) Increase (b) Remain unchanged
(c) Increase or decrease (d) Decrease
9. The liquid meniscus in capillary tube will be convex, if the angle of contact is [EAMCET (Med.) 1995; KCET 2001; Pb. PET 2000]
(a) Greater than 90° (b) Less than 90°
(c) Equal to 90° (d) Equal to 0°
10. If a water drop is kept between two glass plates, then its shape is [CPMT 1997]
- 

(a)



(b)
- 

(c)

(d) None of these
11. The value of contact angle for kerosene with solid surface. [RPMT 2000]
(a) 0° (b) 90°
(c) 45° (d) 33°
12. Nature of meniscus for liquid of 0° angle of contact [RPET 2001]
(a) Plane (b) Parabolic
(c) Semi-spherical (d) Cylindrical
13. A liquid wets a solid completely. The meniscus of the liquid in a sufficiently long tube is
(a) Flat (b) Concave
(c) Convex (d) Cylindrical

14. What is the shape when a non-wetting liquid is placed in a capillary tube
[AFMC 2004]
(a) Concave upward (b) Convex upward
(c) Concave downward (d) Convex downward
15. For which of the two pairs, the angle of contact is same
[J & K CET 2004]
(a) Water and glass; glass and mercury
(b) Pure water and glass; glass and alcohol
(c) Silver and water; mercury and glass
(d) Silver and chromium; water and chromium
16. If the surface of a liquid is plane, then the angle of contact of the liquid with the walls of container is
[MH CET 2004]
(a) Acute angle (b) Obtuse angle
(c) 90° (d) 0°
- (d) The air flows from the larger
3. The surface tension of soap solution is $25 \times 10^{-3} \text{ Nm}^{-1}$. The excess pressure inside a soap bubble of diameter 1 cm is
[AIIMS 1987]
(a) 10 Pa (b) 20 Pa
(c) 5 Pa (d) None of the above
4. When two soap bubbles of radius r_1 and r_2 ($r_2 > r_1$) coalesce, the radius of curvature of common surface is
[MP PMT 1996]
(a) $r_2 - r_1$ (b) $\frac{r_2 - r_1}{r_1 r_2}$
(c) $\frac{r_1 r_2}{r_2 - r_1}$ (d) $r_2 + r_1$
5. The excess pressure due to surface tension in a spherical liquid drop of radius r is directly proportional to
[MP PMT 1987; KCET 2000]
(a) r (b) r^2
(c) r^{-1} (d) r^{-2}
6. A long cylindrical glass vessel has a small hole of radius ' r ' at its bottom. The depth to which the vessel can be lowered vertically in the deep water bath (surface tension T) without any water entering inside is
[MP PMT 1990]
(a) $4T/\rho g$ (b) $3T/\rho g$
(c) $2T/\rho g$ (d) $T/\rho g$
7. If the surface tension of a soap solution is 0.03 MKS units, then the excess of pressure inside a soap bubble of diameter 6 mm over the atmospheric pressure will be
(a) Less than 40 N/m^2 (b) Greater than 40 N/m^2
(c) Less than 20 N/m^2 (d) Greater than 20 N/m^2
8. The excess of pressure inside a soap bubble than that of the outer pressure is
[MP PMT 1989; BHU 1995; MH CET 2002; RPET 2003; AMU (Engg.) 2000]
(a) $\frac{2T}{r}$ (b) $\frac{4T}{r}$

Pressure Difference

1. A soap bubble assumes a spherical surface. Which of the following statement is wrong
[NCERT 1976]
(a) The soap film consists of two surface layers of molecules
back to back
(b) The bubble encloses air inside it
(c) The pressure of air inside the bubble is less than the
atmospheric pressure; that is why the atmospheric pressure has compressed it equally from all sides to give it a spherical shape
(d) Because of the elastic property of the film, it will tend
to shrink to as small a surface area as possible for the volume it has enclosed
2. If two soap bubbles of different radii are in communication with each other
[NCERT 1980; MP PMT/PET 1988; AIEEE 2004]
(a) Air flows from larger bubble into the smaller one
(b) The size of the bubbles remains the same
(c) Air flows from the smaller bubble into the large one and
the larger bubble grows at the expense of the smaller one

(c) $\frac{T}{2r}$ (d) $\frac{T}{r}$

9. The pressure of air in a soap bubble of 0.7 cm diameter is 8 mm of water above the pressure outside. The surface tension of the soap solution is

[MP PET 1991; MP PMT 1997]

- (a) 100 dyne/cm (b) 68.66 dyne/cm
(c) 137 dyne/cm (d) 150 dyne/cm

10. Pressure inside two soap bubbles are 1.01 and 1.02 atmospheres. Ratio between their volumes is

[MP PMT 1991]

- (a) 102 : 101 (b) $(102)^3 : (101)^3$
(c) 8 : 1 (d) 2 : 1

11. A capillary tube of radius r is dipped in a liquid of density ρ and surface tension S . If the angle of contact is θ , the pressure difference between the two surfaces in the beaker and the capillary

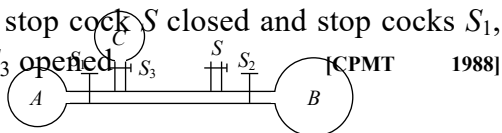
- (a) $\frac{S}{r} \cos \theta$ (b) $\frac{2S}{r} \cos \theta$
(c) $\frac{S}{r \cos \theta}$ (d) $\frac{2S}{r \cos \theta}$

12. The radii of two soap bubbles are r_1 and r_2 . In isothermal conditions, two meet together in vacuum. Then the radius of the resultant bubble is given by

[MP PMT 2001; RPET 1999; EAMCET 2003]

- (a) $R = (r_1 + r_2) / 2$ (b) $R = r_1 r_2 / (r_1 + r_2)$
(c) $R^2 = r_1^2 + r_2^2$ (d) $R = r_1 + r_2$

13. The adjoining diagram shows three soap bubbles A , B and C prepared by blowing the capillary tube fitted with stop cocks, S_1 , S_2 and S_3 . With stop cock S closed and stop cocks S_1 , S_2 and S_3 opened



(a) B will start collapsing with volumes of A and C

increasing

(b) C will start collapsing with volumes of A and B increasing

(c) C and A both will start collapsing with the volume of B increasing

(d) Volumes of A , B and C will become equal at equilibrium

14. When a large bubble rises from the bottom of a lake to the surface, its radius doubles. If atmospheric pressure is equal to that of column of water height H , then the depth of lake is

[AIIMS 1995; AFMC 1997]

- (a) H (b) $2H$
(c) $7H$ (d) $8H$

15. A soap bubble in vacuum has a radius of 3 cm and another soap bubble in vacuum has a radius of 4 cm. If the two bubbles coalesce under isothermal condition, then the radius of the new bubble is

[MP PMT/PET 1998; JIPMER 2000]

- (a) 2.3 cm (b) 4.5 cm
(c) 5 cm (d) 7 cm

16. The volume of an air bubble becomes three times as it rises from the bottom of a lake to its surface. Assuming atmospheric pressure to be 75 cm of Hg and the density of water to be 1/10 of the density of mercury, the depth of the lake is

[AMU 1995]

- (a) 5 m (b) 10 m
(c) 15 m (d) 20 m

17. Excess pressure of one soap bubble is four times more than the other. Then the ratio of volume of first bubble to another one is

[CPMT 1997; MH CET 2000]

- (a) 1 : 64 (b) 1 : 4
(c) 64 : 1 (d) 1 : 2

18. There are two liquid drops of different radii. The excess pressure inside over the outside is

[JIPMER 1997]

- (a) More in the big drop
(b) More in the small drop
(c) Equal in both drops
(d) There is no excess pressure inside the drops

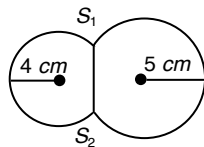
19. If pressure at half the depth of a lake is equal to 2/3 pressure at the bottom of the lake then what is the depth of the lake

[RPET 2000]

- (a) 10m (b) 20m

- (c) $60m$ (d) $30m$
20. If the radius of a soap bubble is four times that of another, then the ratio of their pressures will be [AIIMS 2000]
- (a) 1 : 4 (b) 4 : 1
(c) 16 : 1 (d) 1 : 16
21. A spherical drop of water has radius 1 mm . If surface tension of water is $70 \times 10^{-3}\text{ N/m}$ difference of pressures between inside and out side of the spherical drop is [CPMT 2000; AIIMS 2000]
- (a) 35 N/m^2 (b) 70 N/m^2
(c) 140 N/m^2 (d) Zero
22. The pressure at the bottom of a tank containing a liquid does not depend on
- (a) Acceleration due to gravity
(b) Height of the liquid column
(c) Area of the bottom surface
(d) Nature of the liquid
23. In capillary pressure below the curved surface of water will be
- (a) Equal to atmospheric
(b) Equal to upper side pressure
(c) More than upper side pressure
(d) Lesser than upper side pressure
24. Two soap bubbles of radii r_1 and r_2 equal to 4 cm and 5 cm are touching each other over a common surface S_1S_2 (shown in figure). Its radius will be

- (a) 4 cm
(b) 20 cm
(c) 5 cm
(d) 4.5 cm



25. The pressure inside a small air bubble of radius 0.1 mm situated just below the surface of water will be equal to [Take surface tension of water $70 \times 10^{-3}\text{ Nm}^{-1}$ and atmospheric pressure = $1.013 \times 10^5\text{ Nm}^{-2}$] [AMU (Med.) 2002]
- (a) $2.054 \times 10^3\text{ Pa}$ (b) $1.027 \times 10^3\text{ Pa}$
(c) $1.027 \times 10^5\text{ Pa}$ (d) $2.054 \times 10^5\text{ Pa}$

26. Two bubbles A and B ($A > B$) are joined through a narrow tube. Then [UPSEAT 2001; Kerala (Med.) 2002]
- (a) The size of A will increase
(b) The size of B will increase
(c) The size of B will increase until the pressure equals
(d) None of these
27. Two soap bubbles have different radii but their surface tension is the same. Mark the correct statement [MP PMT 2004]
- (a) Internal pressure of the smaller bubble is higher than the internal pressure of the larger bubble
(b) Pressure of the larger bubble is higher than the smaller bubble [Kerala (Engg.) 2001]
(c) Both bubbles have the same internal pressure
(d) None of the above
28. If the excess pressure inside a soap bubble is balanced by oil column of height 2 mm , then the surface tension of soap solution will be ($r = 1\text{ cm}$ and density $d = 0.8\text{ gm/cc}$) [J & K CET 2004]
- (a) 3.9 N/m (b) $3.9 \times 10^{-2}\text{ N/m}$
(c) $3.9 \times 10^{-3}\text{ N/m}$ (d) 3.9 dyne/m
29. In Jager's method, at the time of bursting of the bubble [RPET 2002]
- (a) The internal pressure of the bubble is always greater than external pressure [MP PMT 2002]
(b) The internal pressure of the bubble is always equal to external pressure
(c) The internal pressure of the bubble is always less than external pressure
(d) The internal pressure of the bubble is always slightly greater than external pressure
30. The excess pressure in a soap bubble is thrice that in other one. Then the ratio of their volume is [RPMT 2003; CPMT 2001]
- (a) 1 : 3 (b) 1 : 9

(c) 27 : 1

(d) 1 : 27

Capillarity

- When two capillary tubes of different diameters are dipped vertically, the rise of the liquid is [NCERT 1978]
 - Same in both the tubes
 - More in the tube of larger diameter
 - Less in the tube of smaller diameter
 - More in the tube of smaller diameter
- Due to capillary action, a liquid will rise in a tube, if the angle of contact is [DPMT 1984; AFMC 1988; BHU 2001]
 - Acute
 - Obtuse
 - 90°
 - Zero
- In the state of weightlessness, a capillary tube is dipped in water, then water
 - Will not rise at all
 - Will rise to same height as at atmospheric pressure
 - Will rise to less height than at atmospheric pressure
 - Will rise up to the upper end of the capillary tube of any length
- Two parallel glass plates are dipped partly in the liquid of density ' d ' keeping them vertical. If the distance between the plates is ' x ', surface tension for liquids is T and angle of contact is θ , then rise of liquid between the plates due to capillary will be [NCERT 1981]
 - $\frac{T \cos \theta}{xd}$
 - $\frac{2T \cos \theta}{xdg}$
 - $\frac{2T}{xdg \cos \theta}$
 - $\frac{T \cos \theta}{xdg}$
- Water rises in a capillary tube to a certain height such that the upward force due to surface tension is balanced by $75 \times 10^{-4} N$ force due to the weight of the liquid. If the surface tension of water is $6 \times 10^{-2} Nm^{-1}$, the inner circumference of the capillary must be [CPMT 1988, 86]
 - $1.25 \times 10^{-2} m$
 - $0.50 \times 10^{-2} m$
 - $6.5 \times 10^{-2} m$
 - $12.5 \times 10^{-2} m$
- It is not possible to write directly on blotting paper or newspaper with ink pen
 - Because of viscosity
 - Because of inertia
 - Because of friction
 - Because of capillarity
- Two capillary tubes P and Q are dipped in water. The height of water level in capillary P is $2/3$ to the height in Q capillary. The ratio of their diameters is [MP PMT 1985]
 - 2 : 3
 - 3 : 2
 - 3 : 4
 - 4 : 3
- Two capillaries made of same material but of different radii are dipped in a liquid. The rise of liquid in one capillary is $2.2 cm$ and that in the other is $6.6 cm$. The ratio of their radii is [MP PET 1990]
 - 9 : 1
 - 1 : 9
 - 3 : 1
 - 1 : 3
- Two capillaries made of the same material with radii $r_1 = 1mm$ and $r_2 = 2mm$. The rise of the liquid in one capillary ($r_1 = mm$) is $30 cm$, then the rise in the other will be [MP PET 1991]
 - $7.5 cm$
 - $60 cm$
 - $15 cm$
 - $120 cm$
- When a capillary is dipped in water, water rises to a height h . If the length of the capillary is made less than h , then
 - The water will come out
 - The water will not come out
 - The water will not rise
 - The water will rise but less than height of capillary
- Water rises upto $10 cm$ height in a long capillary tube. If this tube is immersed in water so that the height above the water surface is only $8 cm$, then [MP PMT 1991]
 - Water flows out continuously from the upper end

- (b) Water rises upto upper end and forms a spherical surface
 (c) Water only rises upto 6 cm height
 (d) Water does not rise at all
12. A vessel, whose bottom has round holes with diameter of 0.1mm, is filled with water. The maximum height to which the water can be filled without leakage is
 (S.T. of water = 75 dyne/cm, $g = 1000 \text{ cm/s}^2$)
 [CPMT 1989; J&K CET 2004]
 (a) 100 cm (b) 75 cm
 (c) 50 cm (d) 30 cm
13. Water rises in a capillary tube when its one end is dipped vertically in it, is 3 cm. If the surface tension of water is $75 \times 10^{-3} \text{ N/m}$, then the diameter of capillary will be
 [MP PET 1989]
 (a) 0.1 mm (b) 0.5 mm
 (c) 1.0 mm (d) 2.0 mm
14. A capillary tube made of glass is dipped into mercury. Then
 [MP PET 1996]
 (a) Mercury rises in the capillary tube
 (b) Mercury rises and flows out of the capillary tube
 (c) Mercury descends in the capillary tube
 (d) Mercury neither rises nor descends in the capillary tube
15. By inserting a capillary tube upto a depth l in water, the water rises to a height h . If the lower end of the capillary is closed inside water and the capillary is taken out and closed end opened, to what height the water will remain in the tube
 [RPET 1996; DPMT 2000]
 (a) Zero (b) $l + h$
 (c) $2h$ (d) h
16. If the diameter of a capillary tube is doubled, then the height of the liquid that will rise is
 [CPMT 1997]
 (a) Twice (b) Half
 (c) Same as earlier (d) None of these
17. If the surface tension of water is 0.06 Nm^{-1} , then the capillary rise in a tube of diameter 1 mm is ($\theta = 0^\circ$)
 [AFMC 1998]
 (a) 1.22 cm (b) 2.44 cm
 (c) 3.12 cm (d) 3.86 cm
18. Two capillary tubes of radii 0.2 cm and 0.4 cm are dipped in the same liquid. The ratio of heights through which liquid will rise in the tubes is
 [MNR 1998]
 (a) 1 : 2 (b) 2 : 1
 (c) 1 : 4 (d) 4 : 1
19. A capillary tube when immersed vertically in liquid records a rise of 3 cm. If the tube is immersed in the liquid at an angle of 60° with the vertical. The length of the liquid column along the tube is
 [MH CET (Med.) 1999]
 (a) 9cm (b) 6cm
 (c) 3cm (d) 2cm
20. The action of a nib split at the top is explained by
 [JIPMER 1999]
 (a) Gravity flow (b) Diffusion of fluid
 (c) Capillary action (d) Osmosis of liquid
21. The correct relation is
 [RPMT 2002]
 (a) $r = \frac{2T \cos \theta}{hdg}$ (b) $r = \frac{hdg}{2T \cos \theta}$
 (c) $r = \frac{2T dgh}{\cos \theta}$ (d) $r = \frac{T \cos \theta}{2hdg}$
22. Water rises upto a height h in a capillary on the surface of earth in stationary condition. Value of h increases if this tube is taken
 (a) On sun
 (b) On poles
 (c) In a lift going upward with acceleration
 (d) In a lift going downward with acceleration
23. During capillary rise of a liquid in a capillary tube, the surface of contact that remains constant is of
 [Pb. PMT 2000]
 (a) Glass and liquid (b) Air and glass
 (c) Air and liquid (d) All of these

24. A shell having a hole of radius r is dipped in water. It holds the water upto a depth of h then the value of r is
[RPMT 2000]
- (a) $r = \frac{2T}{hdg}$ (b) $r = \frac{T}{hdg}$
(c) $r = \frac{Tg}{hd}$ (d) None of these
25. In a capillary tube, water rises by 1.2 mm . The height of water that will rise in another capillary tube having half the radius of the first, is [CPMT 2001; Pb. PET 2002]
- (a) 1.2 mm (b) 2.4 mm
(c) 0.6 mm (d) 0.4 mm
26. If capillary experiment is performed in vacuum then for a liquid there [RPET 2001]
- (a) It will rise (b) Will remain same
(c) It will fall (d) Rise to the top
27. If liquid level falls in a capillary then radius of capillary will [RPET 2001]
- (a) Increase (b) Decrease
(c) Unchanged (d) None of these
28. Water rises to a height h in a capillary at the surface of earth. On the surface of the moon the height of water column in the same capillary will be [MP PMT 2001]
- (a) $6h$ (b) $\frac{1}{6}h$
(c) h (d) Zero
29. Two capillary tubes of same diameter are put vertically one each in two liquids whose relative densities are 0.8 and 0.6 and surface tensions are 60 and 50 dyne/cm respectively. Ratio of heights of liquids in the two tubes $\frac{h_1}{h_2}$ is [MP PMT 2002]
- (a) $\frac{10}{9}$ (b) $\frac{3}{10}$
(c) $\frac{10}{3}$ (d) $\frac{9}{10}$
30. Water rises in a vertical capillary tube upto a height of 2.0 cm . If the tube is inclined at an angle of 60° with the vertical, then upto what length the water will rise in the tube [UPSEAT 2002]
- (a) 2.0 cm (b) 4.0 cm
(c) $\frac{4}{\sqrt{3}} \text{ cm}$ (d) $2\sqrt{2} \text{ cm}$
31. The surface tension for pure water in a capillary tube experiment is
- (a) $\frac{\rho g}{2hr}$ (b) $\frac{2}{hr\rho g}$
(c) $\frac{r\rho g}{2h}$ (d) $\frac{hr\rho g}{2}$
32. In a capillary tube experiment, a vertical 30 cm long capillary tube is dipped in water. The water rises up to a height of 10 cm due to capillary action. If this experiment is conducted in a freely falling elevator, the length of the water column becomes [Orissa JEE 2003; AIEEE 2005]
- (a) 10 cm (b) 20 cm
(c) 30 cm (d) Zero
33. Radius of a capillary is $2 \times 10^{-3} \text{ m}$. A liquid of weight $6.28 \times 10^{-4} \text{ N}$ may remain in the capillary then the surface tension of liquid will be
- (a) $5 \times 10^{-3} \text{ N/m}$ (b) $5 \times 10^{-2} \text{ N/m}$
(c) 5 N/m (d) 50 N/m
34. Two long capillary tubes A and B of radius $R_B > R_A$ dipped in same liquid. Then [Orissa PMT 2004]
- (a) Water rise is more in A than B
(b) Water rises more in B than A
(c) Same water rise in both
(d) All of these according to the density of water
35. If water rises in a capillary tube upto 3 cm . What is the diameter of capillary tube (Surface tension of water = $7.2 \times 10^{-2} \text{ N/m}$) [RPMT 2002]
- (a) $9.6 \times 10^{-4} \text{ m}$ (b) $9.6 \times 10^{-3} \text{ m}$
(c) $9.6 \times 10^{-2} \text{ m}$ (d) $9.6 \times 10^{-1} \text{ m}$
36. When a capillary is dipped in water, water rises 0.015 m in it. If the surface tension of water is $75 \times 10^{-3} \text{ N/m}$, the radius of capillary is [RPMT 2003]
- (a) 0.1 mm (b) 0.5 mm
(c) 1 mm (d) 2 mm

37. In a capillary tube, water rises to 3 mm. The height of water that will rise in another capillary tube having one-third radius of the first is [BHU 2004]
- (a) 1 mm (b) 3 mm
(c) 6 mm (d) 9 mm
38. Kerosene oil rises up the wick in a lantern [NCERT 1980; MNR 1985]
- (a) Due to surface tension of the oil
(b) The wick attracts the kerosene oil
(c) Of the diffusion of the oil through the wick
(d) None of the above
39. Water rises against gravity in a capillary tube when its one end is dipped into water because
- (a) Pressure below the meniscus is less than atmospheric pressure
(b) Pressure below the meniscus is more than atmospheric pressure
(c) Capillary attracts water
(d) Of viscosity
40. A capillary tube of radius R is immersed in water and water rises in it to a height H . Mass of water in the capillary tube is M . If the radius of the tube is doubled, mass of water that will rise in the capillary tube will now be [RPMT 1997; RPET 1999; CPMT 2002]
- (a) M (b) $2M$
(c) $M/2$ (d) $4M$
41. Water rises up to a height h in a capillary tube of certain diameter. This capillary tube is replaced by a similar tube of half the diameter. Now the water will rise to the height of [Kerala PMT 2005]
- (a) $4h$ (b) $3h$
(c) $2h$ (d) h
- surface tension of the loop be T , then what will be the tension in the thread [RPET 1996]
- (a) $\pi R^2 / T$ (b) $\pi R^2 T$
(c) $2\pi RT$ (d) $2RT$
2. A large number of water drops each of radius r combine to have a drop of radius R . If the surface tension is T and the mechanical equivalent of heat is J , then the rise in temperature will be [MP PET 1994; DPMT 2002]
- (a) $\frac{2T}{rJ}$ (b) $\frac{3T}{RJ}$
(c) $\frac{3T}{J}\left(\frac{1}{r} - \frac{1}{R}\right)$ (d) $\frac{2T}{J}\left(\frac{1}{r} - \frac{1}{R}\right)$
3. An air bubble in a water tank rises from the bottom to the top. Which of the following statements are true [Roorkee 2000]
- (a) Bubble rises upwards because pressure at the bottom is less than that at the top.
(b) Bubble rises upwards because pressure at the bottom is greater than that at the top.
(c) As the bubble rises, its size increases
(d) As the bubble rises, its size decreases
4. In a surface tension experiment with a capillary tube water rises upto 0.1 m. If the same experiment is repeated on an artificial satellite, which is revolving around the earth, water will rise in the capillary tube upto a height of [Roorkee 1992]
- (a) 0.1 m
(b) 0.2 m
(c) 0.98 m
(d) Full length of the capillary tube

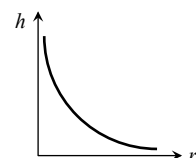
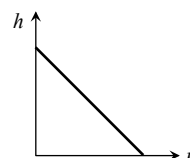
Critical Thinking

Objective Questions

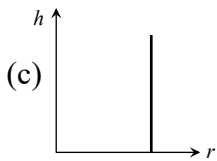
1. There is a horizontal film of soap solution. On it a thread is placed in the form of a loop. The film is pierced inside the loop and the thread becomes a circular loop of radius R . If the

Graphical Questions

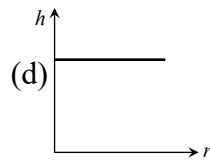
1. The correct curve between the height or depression h of liquid in a capillary tube and its radius is



(a)

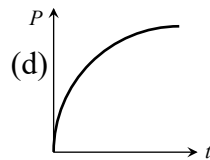
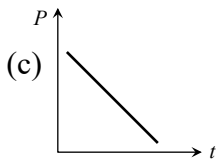
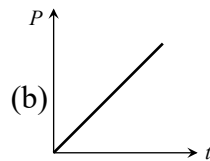
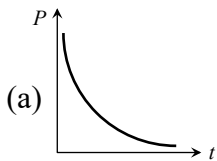


(b)

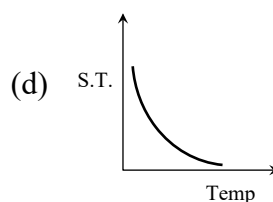
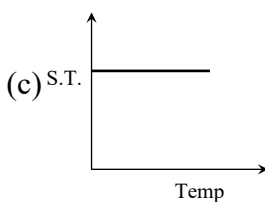
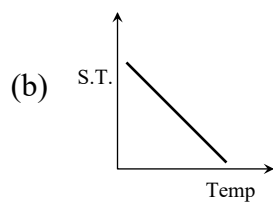
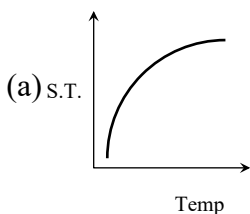


(c)

2. A soap bubble is blown with the help of a mechanical pump at the mouth of a tube. The pump produces a certain increase per minute in the volume of the bubble, irrespective of its internal pressure. The graph between the pressure inside the soap bubble and time t will be-



3. Which graph represents the variation of surface tension with temperature over small temperature ranges for water



Read the assertion and reason carefully to mark the correct option out of the options given below:

- (a) If both assertion and reason are true and the reason is the correct explanation of the assertion.
 (b) If both assertion and reason are true but reason is not the correct explanation of the assertion.
 (c) If assertion is true but reason is false.
 (d) If the assertion and reason both are false.
 (e) If assertion is false but reason is true.

- Assertion : It is easier to spray water in which some soap is dissolved.
Reason : Soap is easier to spread.
- Assertion : It is better to wash the clothes in cold soap solution.
Reason : The surface tension of cold solution is more than the surface tension of hot solution.
- Assertion : When height of a tube is less than liquid rise in the capillary tube, the liquid does not overflow.
Reason : Product of radius of meniscus and height of liquid in capillary tube always remains constant.
- Assertion : A needle placed carefully on the surface of water may float, whereas a ball of the same material will always sink.
Reason : The buoyancy of an object depends both on the material and shape of the object.
- Assertion : A large force is required to draw apart normally two glass plates enclosing a thin water film.
Reason : Water works as glue and sticks two glass plates.

6. Assertion : The impurities always decrease the surface tension of a liquid.
Reason : The change in surface tension of the liquid depends upon the degree of contamination of the impurity.
7. Assertion : The angle of contact of a liquid decrease with increase in temperature.
Reason : With increase in temperature, the surface tension of liquid increase.
8. Assertion : The concept of surface tension is held only for liquids.
Reason : Surface tension does not hold for gases.
9. Assertion : At critical temperature, surface tension of a liquid becomes zero.
Reason : At this temperature, intermolecular forces for liquids and gases become equal. Liquid can expand without any restriction.
10. Assertion : A large soap bubble expands while a small bubble shrinks, when they are connected to each other by a capillary tube.
Reason : The excess pressure inside bubble (or drop) is inversely proportional to the radius.
11. Assertion : Tiny drops of liquid resist deforming forces better than bigger drops.
Reason : Excess pressure inside a drop is directly proportional to surface tension.
12. Assertion : The water rises higher in a capillary tube of small diameter than in the capillary tube of large diameter.
Reason : Height through which liquid rises in a capillary tube is inversely proportional to the diameter of the capillary tube.
13. Assertion : Hot soup tastes better than the cold soup.
Reason : Hot soup has high surface tension and it does not spread properly on our tongue.
14. Assertion : The shape of a liquid drop is spherical.
Reason : The pressure inside the drop is greater than that of outside.

Answers

Surface Tension

1	a	2	b	3	b	4	a	5	d
6	a	7	b	8	b	9	b	10	cd
11	d	12	a	13	b	14	b	15	c
16	d	17	a	18	c	19	c	20	d
21	b	22	d	23	a	24	a	25	c
26	d	27	d	28	b	29	b	30	d
31	d	32	c	33	d	34	c	35	a
36	b	37	b	38	a	39	a	40	c
41	d	42	c	43	d	44	a	45	a
46	a								

Surface Energy

1	a	2	d	3	a	4	d	5	d
6	b	7	c	8	d	9	c	10	c
11	c	12	c	13	c	14	a	15	b
16	b	17	d	18	a	19	a	20	b
21	b	22	d	23	a	24	a	25	b
26	d	27	b	28	d	29	d	30	c
31	ad	32	c	33	b	34	c	35	a
36	a	37	a	38	b	39	a	40	b
41	a	42	a	43	b	44	a	45	c

Angle of Contact

1	b	2	a	3	b	4	d	5	b
6	b	7	d	8	b	9	a	10	c

11	a	12	c	13	b	14	b	15	b
16	d								

Pressure Difference

1	c	2	c	3	b	4	c	5	c
6	c	7	b	8	b	9	b	10	c
11	b	12	c	13	c	14	c	15	c
16	c	17	a	18	b	19	b	20	a
21	c	22	c	23	d	24	b	25	c
26	a	27	a	28	b	29	a	30	d

Capillarity

1	d	2	a	3	d	4	b	5	d
6	d	7	b	8	c	9	c	10	b
11	b	12	d	13	c	14	c	15	d
16	b	17	b	18	b	19	b	20	c
21	a	22	d	23	c	24	a	25	b
26	a	27	a	28	a	29	d	30	b
31	d	32	c	33	b	34	a	35	a
36	c	37	d	38	a	39	a	40	b
41	c								

Critical Thinking Questions

1	d	2	c	3	bc	4	d		
---	---	---	---	---	----	---	---	--	--

Graphical Questions

1	b	2	a	3	b				
---	---	---	---	---	---	--	--	--	--

Assertion and Reason

1	c	2	e	3	a	4	c	5	c
6	e	7	c	8	b	9	a	10	a
11	b	12	a	13	c	14	b		

AS Answers and Solutions

Surface Tension

- (b)
- (a)
- (d) Soap helps to lower the surface tension of solution, thus soap get stick to the dust particles and grease and these are removed by action of water.
- (a)
- (b)
- (b)
- (b)
- (c,d) At critical temperature ($T_c = 370^\circ C = 643 K$), the surface tension of water is zero.
- (d)
- (a) Weight of spiders or insects can be balanced by vertical component of force due to surface tension.
- (b)
- (b)
- (c) Force on each side $= 2TL$ (due to two surfaces)
 \therefore Force on the frame $= 4(2TL) = 8TL$
- (d)
- (a)
- (c) This happens due to viscosity.
- (c)
- (d) The total length of the circular plate on which the force will act $= 2\pi R$
 Force to pull $= 2\pi RT = 2 \times \pi \times 5 \times 75 = 750\pi$ dynes

- (a)
- (b)